

Types of Reactions Worksheet – Solutions

Balance the following equations and indicate the type of reaction taking place:



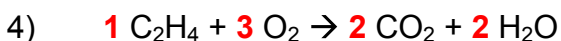
Type of reaction: **double displacement**



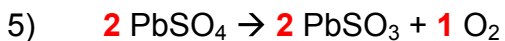
Type of reaction: **double displacement**



Type of reaction: **single displacement**



Type of reaction: **combustion**



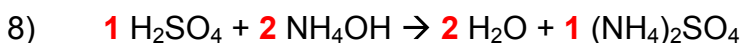
Type of reaction: **decomposition**



Type of reaction: **single displacement**



Type of reaction: **combination**



Type of reaction: **acid-base**